









First Grade Math Homework
Week of Dec. 7, 2015

Student Name: _____



Date	Homework Assignment
Monday, Dec. 7	Complete the Worksheet: 1-22
Tuesday, Dec. 8	Play "Flag Fun" Parent Initials: _____
Wednesday, Dec. 9	Complete the Worksheet: 1-23
Thursday, Dec. 10	http://www.abcya.com/shape_match.htm Play "Shape Match" Parent Initials: _____
Friday, Dec. 11	Have a great weekend!



Extra Credit: On the back of this page or packet, solve the following questions:

Can you make a picture using a trapezoid, circle and square?

Parent Signature: _____



Name _____ Date _____

Parent's signature

Math CC Review 1-22

SHOW YOUR WORK!

Write the number of tens and ones.

8

_____ tens

_____ ones

28

_____ tens

_____ ones

Write the number that makes the sentence true.

$$4 + 2 = 2 + \underline{\quad}$$

$$5 + \underline{\quad} = 3 + 5$$

Draw a circle around the greater number below:

88

68

Add.

$$2 + 7 = \underline{\quad}$$

$$5 + 1 = \underline{\quad}$$

True or False?


$$6 = 4 + 2$$

T or F

Draw a picture to solve the word problem.

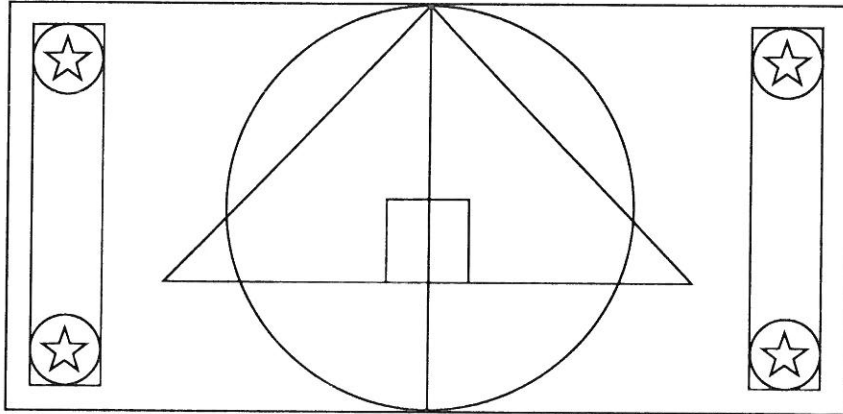
Tara has 6 red tulips and 3 orange tulips. How many tulips does she have?

FLAG FUN



"This is the flag of the Galactic Empire. What shapes can you find in our flag?"

Count the shapes you see in the flag. On the lines, write how many of each shape you see.




How many?



Design your own flag using these shapes: ☆ □ ○ △

How many of each shape does your flag have?



Name _____ Date _____

Parent's signature

Math CC Review 1-23

SHOW YOUR WORK!

Write the number of tens and ones.

29

_____ tens

_____ ones

67

_____ tens

_____ ones

Write the number that makes the sentence true.

$$9 + 3 = 3 + \underline{\quad}$$

$$7 + \underline{\quad} = 6 + 7$$

Draw a circle around the greater number below:

23

32

Add.

$$8 + 2 = \underline{\quad}$$

$$3 + 1 = \underline{\quad}$$

True or False?

$$12 = 6 + 6$$

T or F

Draw a picture to solve the word problem.

Michael won 5 silver medals and 4 gold medals at the Olympics. How many medals did he win in all?