

First Grade Math Homework
Week of Nov. 30, 2015

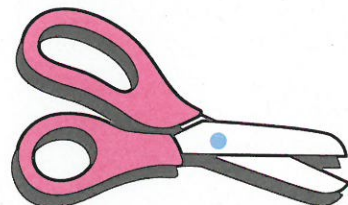
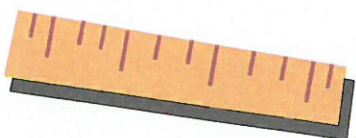
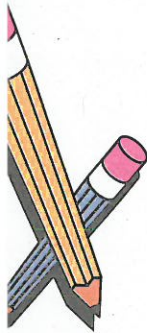



Student Name: _____

Date	Homework Assignment
Monday, Nov. 30	Complete the Worksheet: 1-20
Tuesday, Dec. 1	Play "Lucky Gingers!" Parent Initials: _____
Wednesday, Dec. 2	Complete the Worksheet: 1-21
Thursday, Dec. 3	http://pbskids.org/peg/games/magical-shape-hunt Play "Magical Shape Hunt" Parent Initials: _____
Friday, Dec. 4	Have a great weekend!

Extra Credit: On the back of this page or packet, solve the following questions:

Can you make a picture using a circle, square, triangle and rectangle?

Parent Signature: _____



Name _____ Date _____

Parent's signature

Math CC Review 1-20

SHOW YOUR WORK!

Write the number of tens and ones.

26

_____ tens

_____ ones

93

_____ tens

_____ ones

Write the number that makes the sentence true.

$$5 + 7 = 7 + \underline{\quad}$$

$$8 + \underline{\quad} = 1 + 8$$

Use sticks and dots to represent the number below.

39

Add.

$$2 + 3 = \underline{\quad}$$

$$4 + 1 = \underline{\quad}$$

Draw a picture to solve the word problem.

Lizzie earned 4 star stickers on Monday. She needs 8 star stickers to get a prize on Friday. How many more star stickers does she need in order to earn her prize?

Lucky Gingers! Roll and Cover

Roll 3 dice. Add the numbers together and cover the sum.

4

11


15

9

18



8



16


5

3

10

13

7



14



6

17

12

Name _____ Date _____

Parent's signature

Math CC Review 1-21

SHOW YOUR WORK!

Write the number of tens and ones.

26

_____ tens

_____ ones

93

_____ tens

_____ ones

Write the number that makes the sentence true.

$$5 + 7 = 7 + \underline{\quad}$$

$$8 + \underline{\quad} = 1 + 8$$

Draw a circle around the greater number below:

45

31

Add.

$$2 + 3 = \underline{\quad}$$

$$4 + 1 = \underline{\quad}$$

True or False?

$$7 = 4 + 2$$

T or F

Draw a picture to solve the word problem.

Carl has 7 baseball cards. Matt has 9 baseball cards. How many more baseball cards does Matt have than Carl?